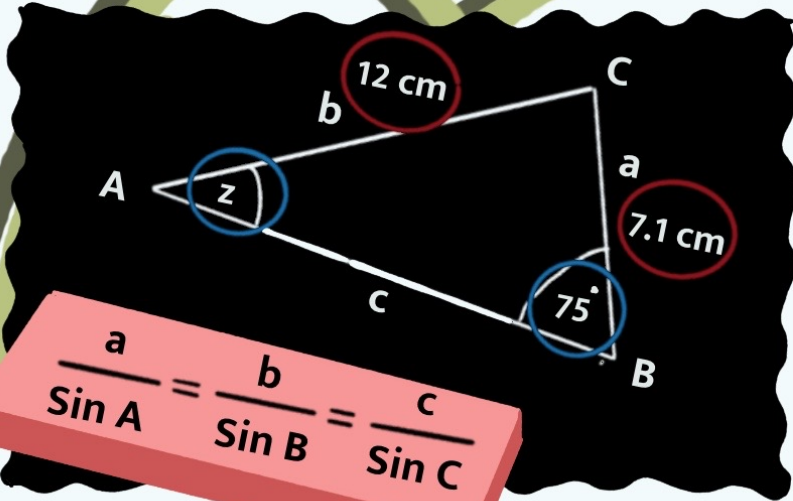


Sine

&

Cosine

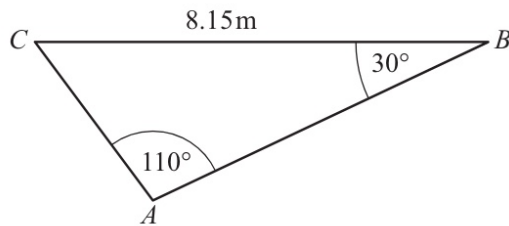
Rules



$$\frac{a}{\sin A} = \frac{b}{\sin B} = \frac{c}{\sin C}$$



Question 1



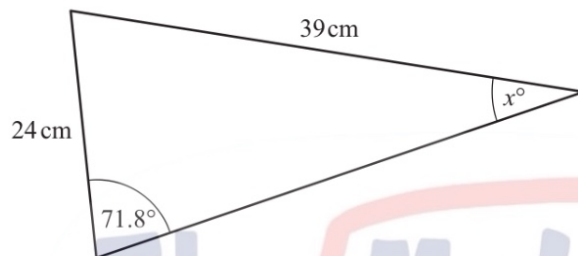
NOT TO
SCALE

Calculate AC.

[3]

$$\frac{8.15}{\sin 110^\circ} = \frac{x}{\sin 30^\circ}$$
$$x = \frac{8.15 \times \sin 30^\circ}{\sin 110^\circ}$$
$$= 4.34\text{m}$$

Question 2



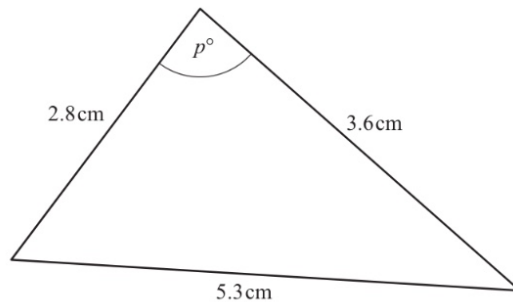
NOT TO
SCALE

Find the value of x .

[3]

$$\frac{39}{\sin 71.8^\circ} = \frac{24}{\sin x}$$
$$\sin x = \frac{24 \times \sin 71.8^\circ}{39}$$
$$x = \sin^{-1}\left(\frac{24 \times \sin 71.8^\circ}{39}\right)$$
$$= 35.77^\circ$$

Question 3



NOT TO
SCALE

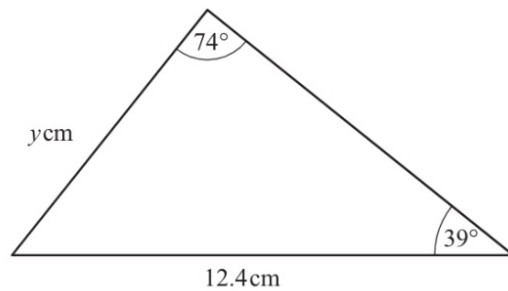
Find the value of p .

[4]

$$\cos \theta = \frac{b^2 + c^2 - a^2}{2bc}$$
$$\cos p = \frac{2.8^2 + 3.6^2 - 5.3^2}{2(2.8)(3.6)}$$
$$\cos p = \frac{-81}{224}$$
$$p = \cos^{-1}\left(\frac{-81}{224}\right) = 111.2^\circ$$

The Maths Society

Question 4



NOT TO SCALE

Calculate the value of y .

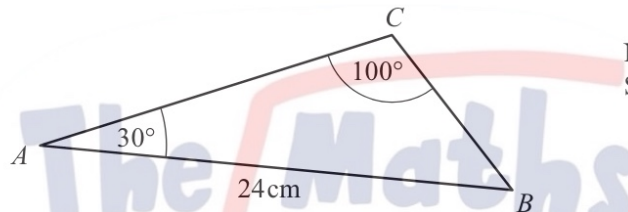
[3]

$$\frac{12.4}{\sin 74} = \frac{y}{\sin 39}$$

$$y = \frac{12.4 \times \sin 39}{\sin 74}$$

$$= 8.1 \text{ cm}$$

Question 5



NOT TO SCALE

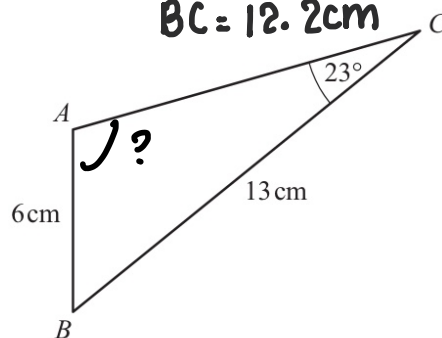
Use the sine rule to calculate BC .

[3]

$$\frac{24}{\sin 100} = \frac{BC}{\sin 30}$$

$$BC = \frac{24 \times \sin 30}{\sin 100}$$

Question 6



NOT TO SCALE

In triangle ABC , $AB = 6 \text{ cm}$, $BC = 13 \text{ cm}$ and angle $ACB = 23^\circ$. Calculate angle BAC , which is obtuse.

[4]

$$\frac{6}{\sin 23} = \frac{13}{\sin A}$$

$$\sin A = \frac{13 \times \sin 23}{6}$$

$$A = \sin^{-1}\left(\frac{13 \times \sin 23}{6}\right)$$

$$= 57.8^\circ$$

Question 1

$$\cos \theta = \frac{b^2 + c^2 - a^2}{2(b)(c)}$$

A triangle has sides of length 2 cm, 8 cm and 9 cm.



$$\begin{aligned} a &= 2 \\ b &= 8 \\ c &= 9 \end{aligned}$$

Calculate the value of the largest angle in this triangle.

[4]

$$\cos A = \frac{8^2 + 9^2 - 2^2}{2(8)(9)}$$

$$\begin{aligned} \cos C &= \frac{8^2 + 2^2 - 9^2}{2(8)(2)} \\ &= 114.0 \end{aligned}$$

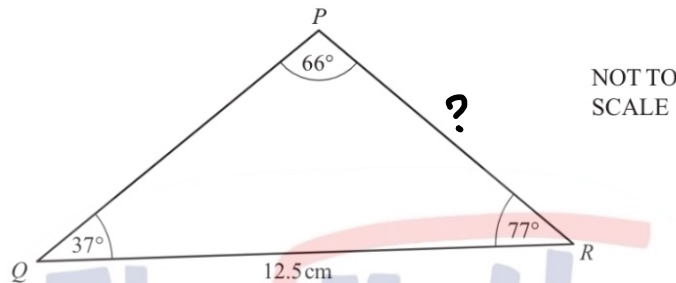
$$A = 11.7^\circ$$

$$\cos B = \frac{2^2 + 9^2 - 8^2}{2(2)(9)}$$

\therefore largest triangle (C)

$$B = 54.3$$

Question 2



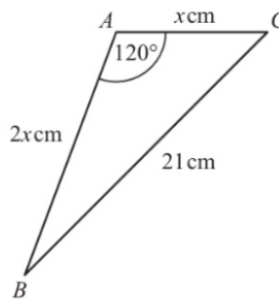
Calculate PR .

$$\begin{aligned} \frac{12.5}{\sin 66} &= \frac{PR}{\sin 37} \\ PR &= \frac{12.5 \times \sin 66}{\sin 37} \\ &= 19.0 \text{ cm} \end{aligned}$$

[3]

Question 3

NOT TO SCALE



In triangle ABC , $AB = 2x$ cm, $AC = x$ cm, $BC = 21$ cm and angle $BAC = 120^\circ$.

Calculate the value of x .

[3]

$$\cos \theta = \frac{b^2 + c^2 - a^2}{2bc}$$

$$\cos 120 = \frac{(2x)^2 + (x)^2 - 21^2}{2(2x)(x)}$$

$$-\frac{1}{2} = \frac{4x^2 + x^2 - 441}{4x^2}$$

$$-2x^2 = 5x^2 - 441$$

$$441 = 7x^2$$

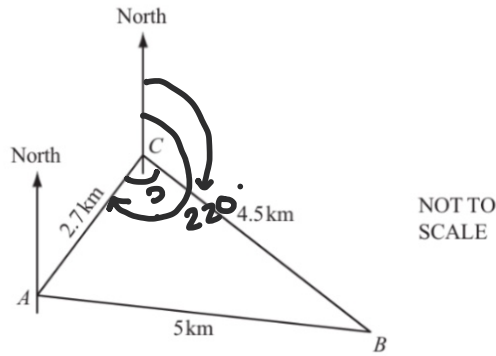
$$63 = x^2$$

$$x = \sqrt{63}$$

$$= 3\sqrt{7} = 7.9 \text{ cm}$$

The Maths Society

Question 4



The diagram shows 3 ships A , B and C at sea.

$AB = 5$ km, $BC = 4.5$ km and $AC = 2.7$ km.

(a) Calculate angle ACB .

Show all your working.

$$\cos C = \frac{b^2 + a^2 - c^2}{2ba}$$

$$\cos C = \frac{2.7^2 + 4.5^2 - 5^2}{2(2.7)(4.5)}$$

$$C = \cos^{-1}\left(\frac{127}{1215}\right) = 84^\circ$$

[4]

$$\cos C = \frac{127}{1215}$$

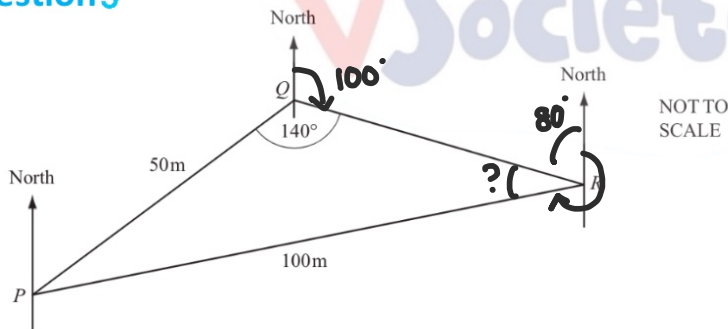
(b) The bearing of A from C is 220° .

Calculate the bearing of B from C .

$$220^\circ - 84^\circ = 136^\circ$$

[1]

Question 5



The diagram shows three points P , Q and R on horizontal ground.

$PQ = 50$ m, $PR = 100$ m and angle $PQR = 140^\circ$.

(a) Calculate angle PRQ .

$$\frac{\sin R}{50} = \frac{\sin 140}{100}$$

$$\sin R = \frac{50 \times \sin 140}{100}$$

$$R = \sin^{-1}\left(\frac{50 \times \sin 140}{100}\right) = 18.7^\circ$$

[3]

(b) The bearing of R from Q is 100° .

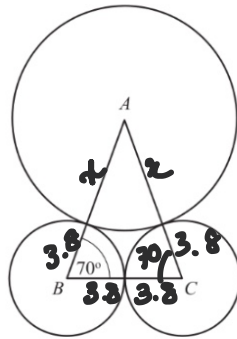
Find the bearing of P from R .

$$180^\circ - 100^\circ = 80^\circ$$

$$360^\circ - 80^\circ - 18.7^\circ = 261.3^\circ$$

[2]

Question 6



NOT TO SCALE

The diagram shows three touching circles.

A is the centre of a circle of radius x centimetres.

B and C are the centres of circles of radius 3.8 centimetres. Angle $ABC = 70^\circ$.

Find the value of x .

$$180^\circ - 70^\circ - 70^\circ = 40^\circ$$

[3]

$$BC = 3.8 + 3.8 = 7.6 \text{ cm}$$

$$\frac{7.6}{\sin 40^\circ} = \frac{x}{\sin 70^\circ}$$

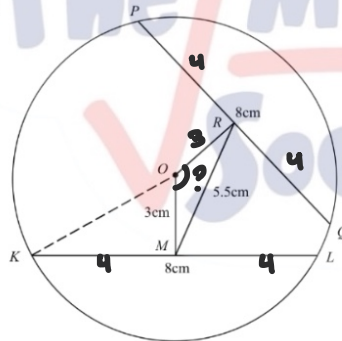
$$x = \frac{7.6 \times \sin 70^\circ}{\sin 40^\circ}$$

$$x = 11.11$$

$$= 11.11 - 3.8 = 7.31 \text{ cm}$$

Question 7

NOT TO SCALE



In the circle, centre O , the chords KL and PQ are each of length 8 cm.

M is the mid-point of KL and R is the mid-point of PQ . $OM = 3$ cm.

(a) Calculate the length of OK .

$$OK^2 = 3^2 + 4^2$$

$$OK = \sqrt{9 + 16}$$

$$= 5 \text{ cm}$$

[2]

(b) RM has a length of 5.5 cm. Calculate angle ROM .

$$5.5^2 = 8^2 + 3^2 - 2 \times 8 \times 3 \times \cos \theta$$

$$5.5^2 - 8^2 - 3^2 = -18 \cos \theta$$

$$\cos \theta = \frac{5.5^2 - 18}{-18}$$

$$= \frac{-49}{72}$$

$$\theta = \cos^{-1}\left(\frac{-49}{72}\right) = 132.9^\circ$$

[3]

